




# Crabs and Jellyfish



Each crab and jellyfish has a number. Use their numbers to answer the following.

1. Find 2 numbers with a total of 15. \_\_\_\_\_
2. Find 2 numbers with a total of 18. \_\_\_\_\_
3. Find 2 numbers with a total of 21. \_\_\_\_\_
4. Find 3 numbers with a total of 32. \_\_\_\_\_
5. Find 3 numbers with a total of 40. \_\_\_\_\_
6. Find 3 numbers with a total of 37. \_\_\_\_\_
7. Find 3 numbers with a total of 43. \_\_\_\_\_